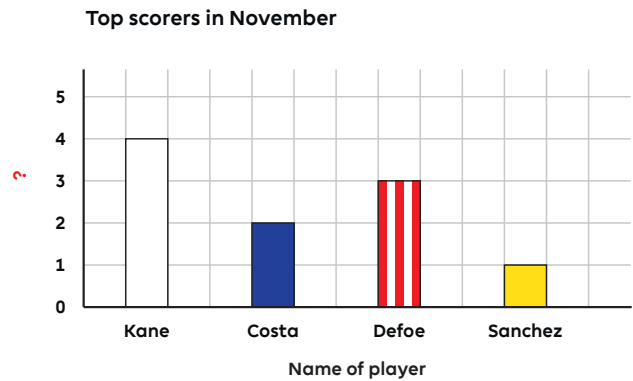


Maths quiz – Handling Data

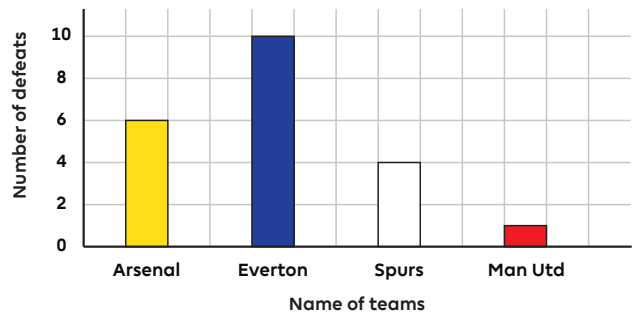
1. This bar chart has a label missing. What should the missing label say?

- ☐ A. Month
- ☐ B. Number of goals
- ☐ C. Top Scorer
- ☐ D. Number of wins



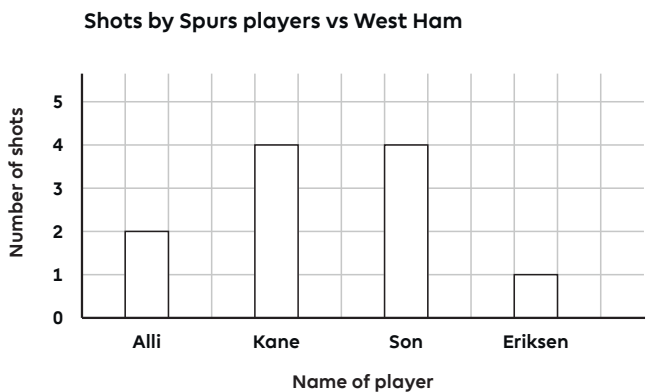
2. What is missing from this graph?

- ☐ A. The axes
- ☐ B. A scale
- ☐ C. Labels
- ☐ D. A title



3. What does the vertical axis represent in this bar chart?

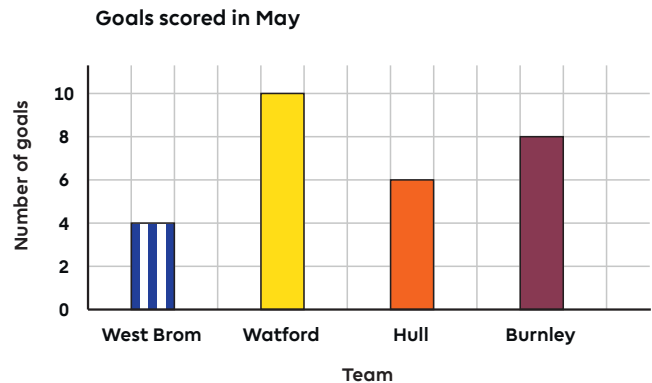
- ☐ A. Number of shots
- ☐ B. Name of player
- ☐ C. Shots by West Ham players
- ☐ D. Top scorer



Maths quiz – Handling Data (continued)

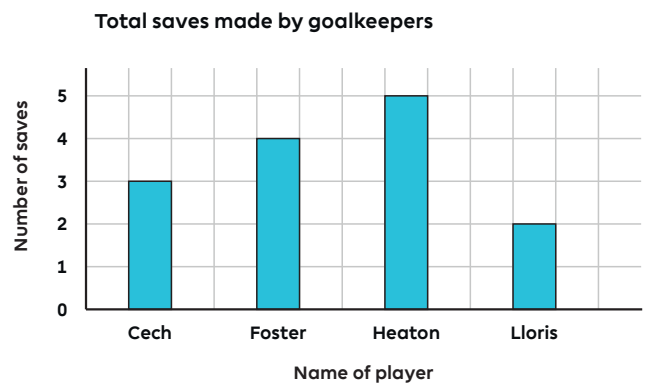
4. Which team scored the most goals?

- A. West Brom
- B. Watford
- C. Hull
- D. Burnley




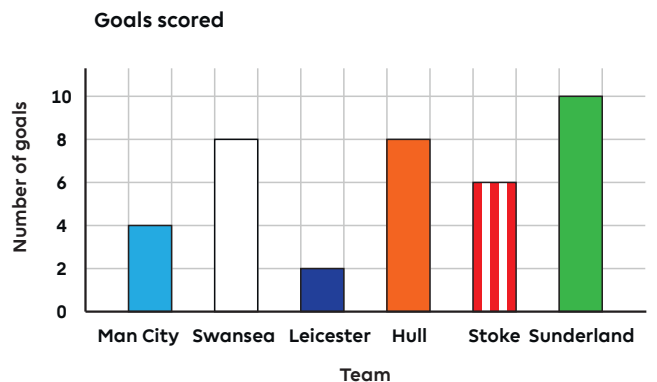
5. How many saves did Foster make?

- A. Two
- B. Five
- C. Three
- D. Four



6. What is the difference in goals between Swansea and Leicester?

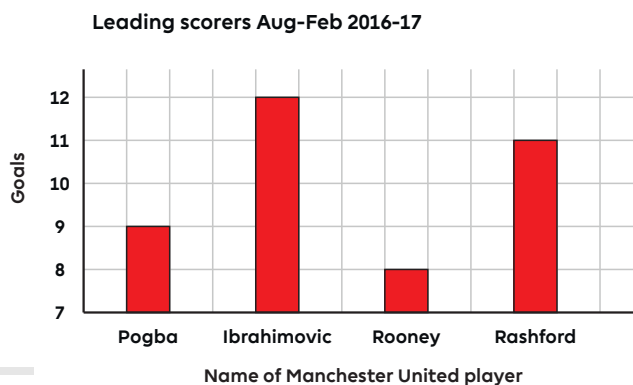
- A. Swansea have scored more
- B. Two
- C. Six
- D. Four



Maths quiz – Handling Data (continued)

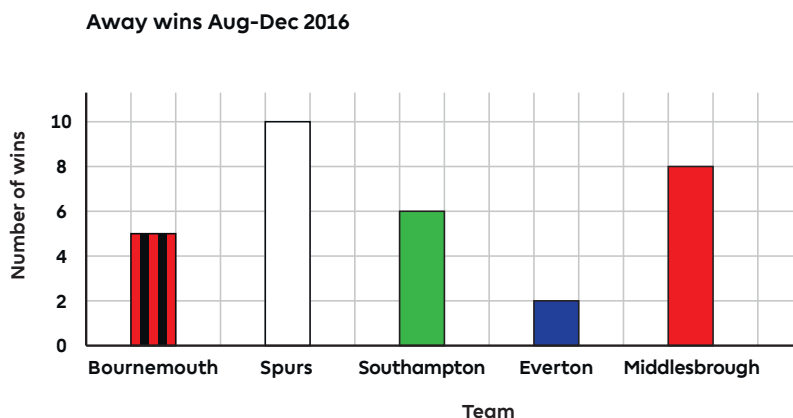
7. What is the total number of goals scored by Rashford and Pogba?

- A. 20
- B. 9
- C. 11
- D. 6




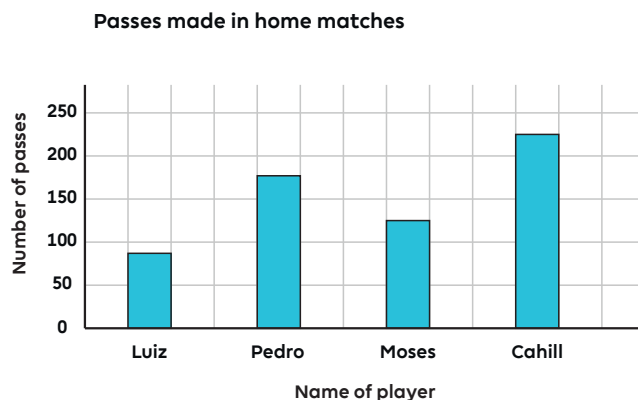
8. How many fewer wins did Everton have than Bournemouth?

- A. 2
- B. 7
- C. 4
- D. 3



9. One player has made 177 passes. Who is it?

- A. Moses
- B. Pedro
- C. Cahill
- D. You can't tell



Maths quiz – Handling Data (continued)

10. What would be the best scale to use to make a bar chart for this information?

- ☐ A. 0, 1, 2, 3, 4 and so on
 - ☐ B. 0, 5, 10, 15, 20 and so on
 - ☒ C. 0, 10, 20, 30, 40 and so on
 - ☐ D. 0, 100, 200, 300, 400 and so on
-

Minutes played this season		
Vardy	Agüero	Lukaku
820	485	710

